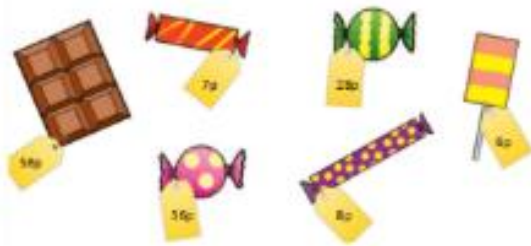


Maths Activity Day 2

Watch this Oak Academy video on adding 2 digit numbers and ones with re-grouping and complete the activities.

<https://teachers.thenational.academy/lessons/adding-two-digit-numbers-and-ones-with-regrouping-6cv38c>



How much do these children spend?

1.  buys  and 
2.  buys  and 
3.  buys  and 





Challenge:
What would you buy?
How much would it cost?

Now follow this link to recap subtracting 2 digit numbers and ones with regrouping

<https://teachers.thenational.academy/lessons/subtracting-a-2-digit-number-and-ones-with-regrouping-6nh34r>



How much do these children have left?

1.  has 52 pence and buys 
2.  has 74 pence and buys 
3.  has 21 pence and buys 

I started with 32 pence and now have 24 pence left. What did I buy?