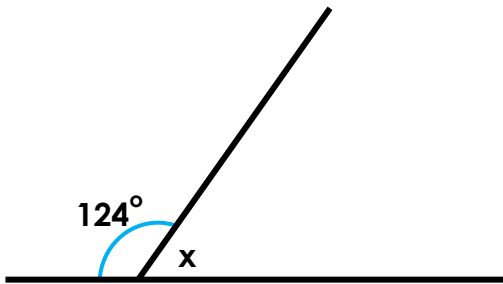


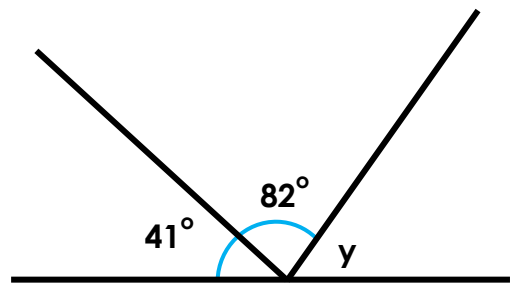
Angles on a Straight Line

1. True or false? Both angles x and $y = 57^\circ$.

A.



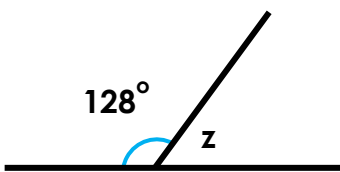
B.



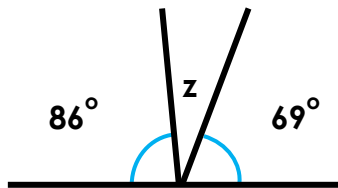
Angles not drawn to scale

2. Which diagram has a missing angle of 22° ? Put an 'X' in the correct box.

A.



B.



C.

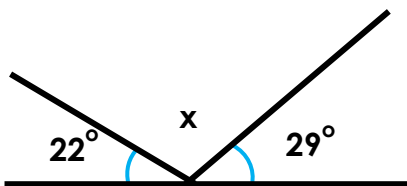


Angles not drawn to scale

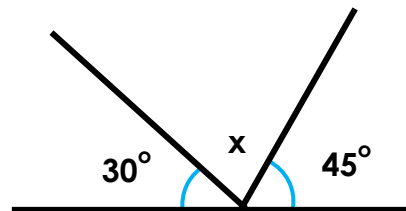
3. Florence thinks that her missing angle is bigger than Freya's.



Florence



Angles not drawn to scale



Freya

Is she correct? Explain your answer.