

Maths Day 1 – using money

We would like you to spend the next two days practising using money to buy things.







First watch this lesson about working out the value with coins...

<https://www.bbc.co.uk/bitesize/topics/zp8dmp3/articles/zcrq2p3>

Have a go at this piggy bank game. Play the 'counting' version to add up the coins.

<https://www.topmarks.co.uk/money/coins-game>

Now look at the coins in these boxes. Can you work out how much money is in each box?

		
1.	2.	3.
		
4.	5.	6.